

Introduction

Many interesting and useful functions can be defined as the area under some other function. There is a very nice relationship between the original function and the area function. We will explore that relationship in this worksheet.

Area Functions

1a Define $A(x)$ to be the **area** bounded by the x -axis and the function $f(x) = 3$ between the y -axis and the vertical line at x . (See the diagram.)

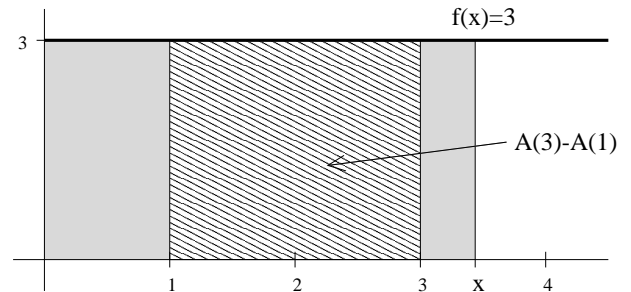
$$A(1) = \underline{\quad 3 \quad} \qquad A(2) = \underline{\quad 6 \quad}$$

$$A(3) = \underline{\quad 9 \quad} \qquad A(4) = \underline{\quad 12 \quad}$$

and, in general,

$$A(x) = \underline{\quad 3x \quad} \text{ (a formula)}$$

Shade the region whose area is $A(3) - A(1)$.



1b Define $B(x)$ to be the **area** bounded by the x -axis and the function $g(x) = 1 + x$ between the y -axis and the vertical line at x . (See the diagram.)

$$B(1) = \underline{\quad 3/2 \quad} \qquad B(2) = \underline{\quad 4 \quad}$$

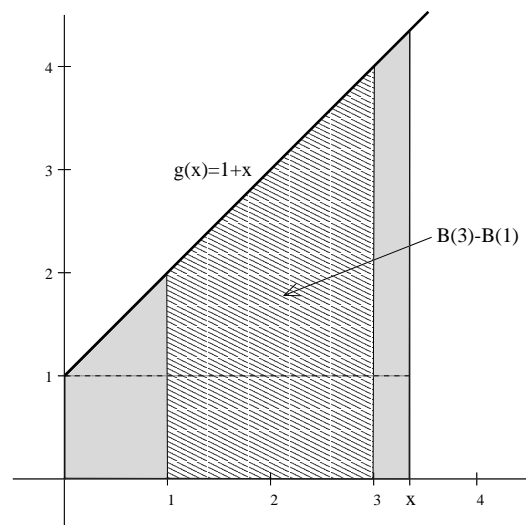
$$B(3) = \underline{\quad 15/2 \quad} \qquad B(4) = \underline{\quad 12 \quad}$$

and, in general,

$$B(x) = \underline{\quad x + \frac{1}{2}x^2 \quad} \text{ (a formula)}$$

(Hint: think triangle + rectangle)

Shade the region whose area is $B(3) - B(1)$.



1c Define $C(x)$ to be the **area** bounded by the x -axis and the function $h(x) = 6 - x$ between the y -axis and the vertical line at x . (See the diagram.)

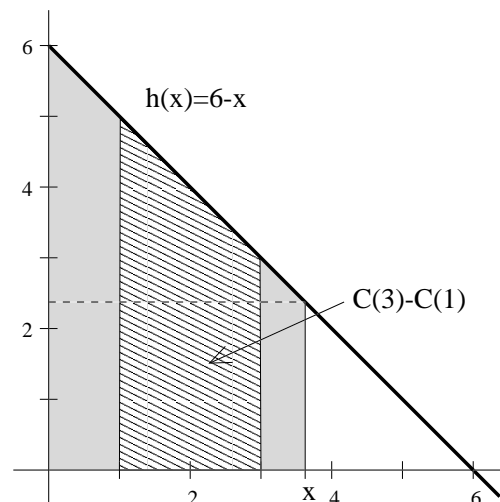
$$C(1) = \underline{\quad 11/2 \quad} \qquad C(2) = \underline{\quad 10 \quad}$$

$$C(3) = \underline{\quad 27/2 \quad} \qquad C(4) = \underline{\quad 16 \quad}$$

and, in general,

$$C(x) = \underline{\quad 6x - \frac{1}{2}x^2 \quad} \text{ (a formula)}$$

Shade the region whose area is $C(3) - C(1)$.



For each of the above, the **area** increases as x increases. So $A(x)$, $B(x)$ and $C(x)$ are increasing functions even though $f(x)$ is constant, $g(x)$ is increasing and $h(x)$ is decreasing. (There is a difficulty with $C(x)$ when x gets larger than 6. We'll deal with that later.)

1d Now calculate the derivatives of the area functions from problems 1, 2 and 3 above:

$$A'(x) = \underline{\quad 3 \quad} \quad B'(x) = \underline{\quad 1 + x \quad} \quad C'(x) = \underline{\quad 6 - x \quad}$$

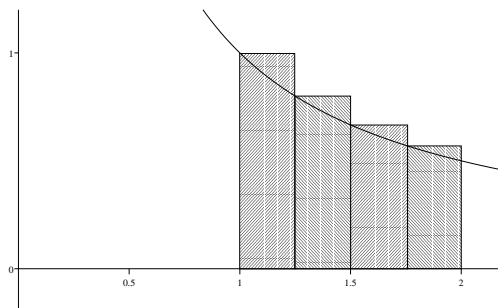
How is $A'(x)$ related to $f(x)$ in problem 1? *same*

How is $B'(x)$ related to $g(x)$ in problem 2? *same*

How is $C'(x)$ related to $h(x)$ in problem 3? *same*

The Natural Logarithm

2a Define $A(x)$ to be the **area** bounded by the x -axis and the function $f(x) = 1/x$ between the line $x = 1$ and the vertical line at x . (See the diagram.)



Based on your work in problem 1,

$$A'(x) = \underline{\quad 1/x \quad}$$

$$\text{Compute } A(1) = \underline{\quad 0 \quad}$$

Compute $A(x) = \underline{\quad \ln(x) \quad}$ $A(x)$ is an antiderivative of $1/x$ and so must be of the form $\ln(x) + C$ for some constant C . But $0 = A(1) = \ln(1) + C = C$.

2b So the area under $f(x) = 1/x$ between $x = 1$ and $x = 2$ is equal to $\ln(2)$. Outline this area on the graph. We'll use estimates of this area to compute approximations of $\ln(2)$.

2c Slice the area up into 4 pieces by drawing 3 evenly spaced vertical lines from the x -axis up to the curve.

2d Using the left side of each slice as the height, sketch in 4 rectangles on your graph. What are the x -coordinates of the sides of the rectangles? Plug these x -coordinates into $f(x) = 1/x$ to compute the heights of the rectangles. Find the areas of the 4 rectangles and add them up. This is your first approximation of the area under the curve, and $\ln(2)$. Is it an over-estimate or an under-estimate?

$$x_0 = 1, x_1 = 5/4, x_2 = 3/2, x_3 = 7/4, x_4 = 2$$

$$f(1) = 1, f(5/4) = 4/5, f(3/2) = 2/3, f(7/4) = 4/7$$

$$A_1 = 1 \times 1/4 = 1/4, A_2 = 4/5 \times 1/4 = 1/5, A_3 = 2/3 \times 1/4 = 1/6, A_4 = 4/7 \times 1/4 = 1/7$$

$$\ln(2) \approx 1/4 + 1/5 + 1/6 + 1/7 \approx 0.7595238$$

Overestimate, because rectangles are above the curve.

2e Using the right side of each slice as the height, sketch in 4 rectangles on your graph. Find the area of these rectangles and add them up. This is your second approximation of the area under the curve, and $\ln(2)$. Is it an over-estimate or an under-estimate?

$$x_0 = 1, x_1 = 5/4, x_2 = 3/2, x_3 = 7/4, x_4 = 2$$

$$f(5/4) = 4/5, f(3/2) = 2/3, f(7/4) = 4/7, f(2) = 1/2$$

$$A_1 = 4/5 \times 1/4 = 1/5, A_2 = 2/3 \times 1/4 = 1/6, A_3 = 4/7 \times 1/4 = 1/7, A_4 = 1/2 \times 1/4 = 1/8$$

$$\ln(2) \approx 1/5 + 1/6 + 1/7 + 1/8 \approx 0.6345238$$

Underestimate, because rectangles are below the curve.

2f Take the average of your two estimates to get a new estimate of $\ln(2)$. How does it compare with the value given by your calculator?

$$\ln(2) \approx 0.6970238$$

Calculator gives 0.69314718. Good to two decimals.

2g Use the midpoint of each slice to determine the height and sketch in the resulting 4 rectangles. Use them to approximate $\ln(2)$. Can you tell if you are getting an over-estimate or an under-estimate? Which of your four estimates gives you the closest answer to the value given by your calculator?

$$\bar{x}_1 = 9/8, \bar{x}_2 = 11/8, \bar{x}_3 = 13/8, \bar{x}_4 = 15/8$$

$$f(9/8) = 8/9, f(11/8) = 8/11, f(13/8) = 8/13, f(15/8) = 8/15$$

$$A_1 = 8/9 \times 1/4 = 2/9, A_2 = 8/11 \times 1/4 = 2/11, A_3 = 8/13 \times 1/4 = 2/13, A_4 = 8/15 \times 1/4 = 2/15$$

$$\ln(2) \approx 2/9 + 2/11 + 2/13 + 2/15 \approx 0.69121989$$

This one is closest. It's an underestimate, but it's hard to tell without using the calculator.